

To estimate the volume of objects

Maths

Mr Barton




Independent Task



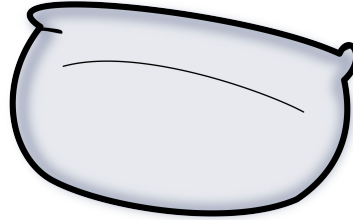
1. Match the objects to their estimated volume.
2. Put in order, starting with the greatest, estimated volume.




Cereal box



Cucumber



Pillow



Concrete mixing truck

6000000 cm³
150cm³
33,000 cm³
1500cm³

NOT TO SCALE