


Geography

Using aerial and satellite images with maps

Downloadable Resources

Mr D May



OAK
NATIONAL
ACADEMY

Task 1 - Complete these questions

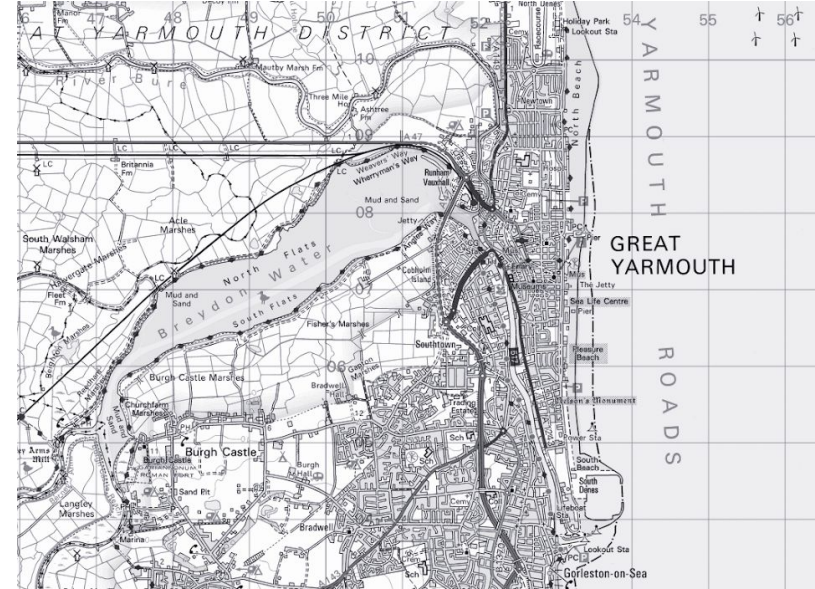
1. What is an aerial photograph?

2. What is a satellite image?

3. How is an aerial photo different from a satellite image?




Task 2 - Explain the different reasons for choosing an aerial photo or a map when studying a place. You can use the image and OS Map below to support your answer



Task 3 - Can you identify these famous landmarks or places using aerial photos and satellite images?

A.



Task 3 - Can you identify these famous landmarks or places using aerial photos and satellite images?

B.



Task 3 - Can you identify these famous landmarks or places using aerial photos and satellite images?

C.



Task 3 - Can you identify these famous landmarks or places using aerial photos and satellite images?

D.



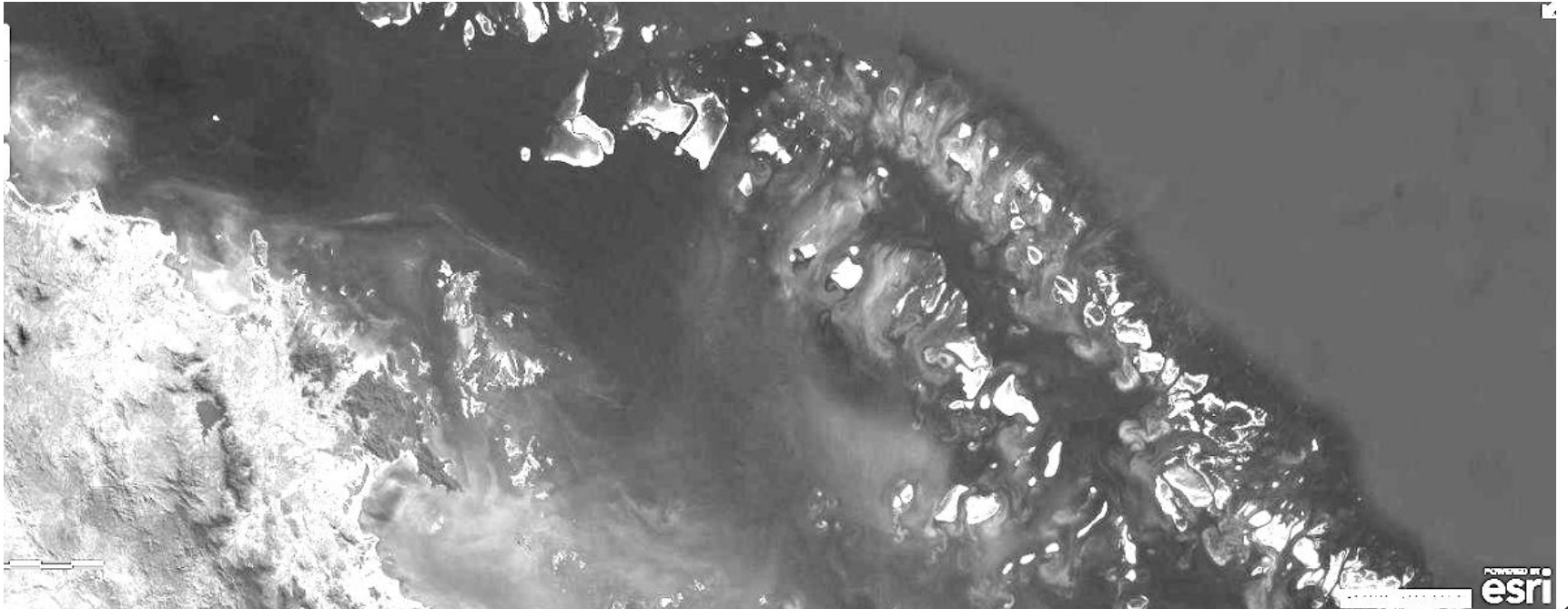
Task 3 - Can you identify these famous landmarks or places using aerial photos and satellite images?

E.



Task 3 - Can you identify these famous landmarks or places using aerial photos and satellite images?

F.



Task 3 - Can you identify these famous landmarks or places using aerial photos and satellite images?

G.



Task 3 - Can you identify these famous landmarks or places using aerial photos and satellite images?

H.



Task 3 - Can you identify these famous landmarks or places using aerial photos and satellite images?

I.



Task 3 - Can you identify these famous landmarks or places using aerial photos and satellite images?

J.

