


Maths

# Independent Task:

## To identify regular and irregular polygons

Miss Miles

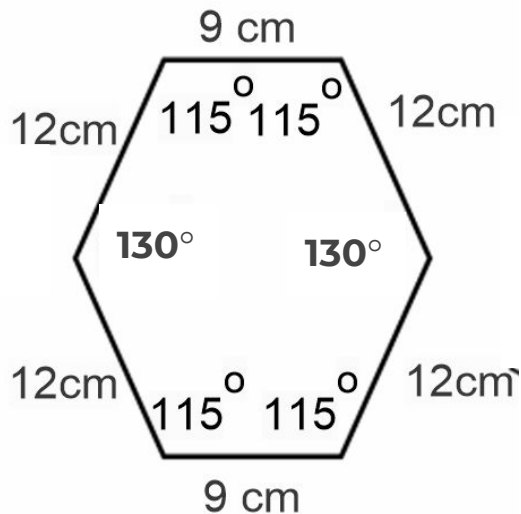
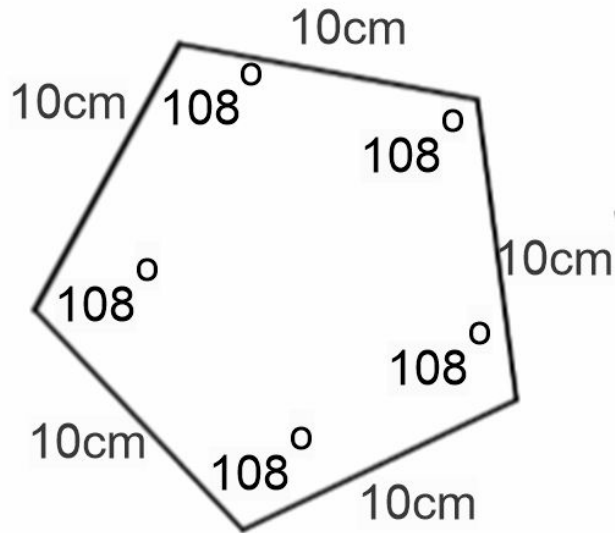


**OAK**  
NATIONAL  
ACADEMY

# Independent Task

## Task 1 of 2

1. Name the shape.
2. Identify if it is regular or irregular.
3. Explain how you know.
4. Find the sum of the interior angles.
5. Find the perimeter.



# Independent Task

## Task 2 of 2

1. Name these shapes.
2. Decide if they are regular or irregular.
3. Explain how you know.

