

Using bar models to solve word problems

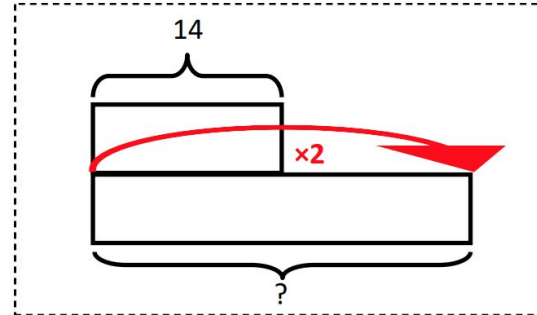
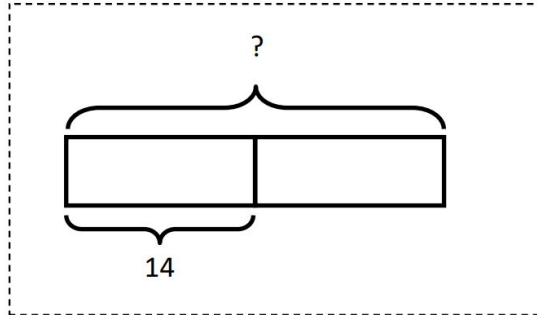
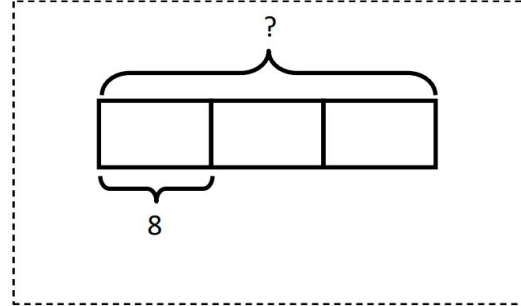
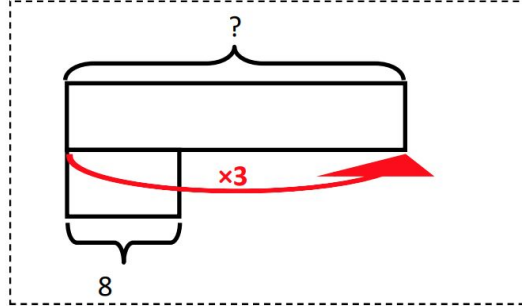
Mathematics

Miss Brinkworth



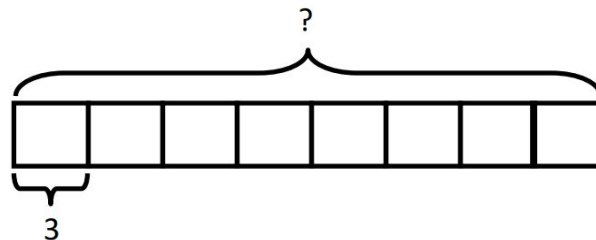
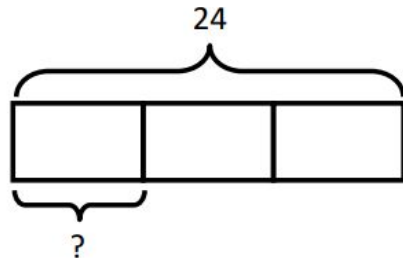
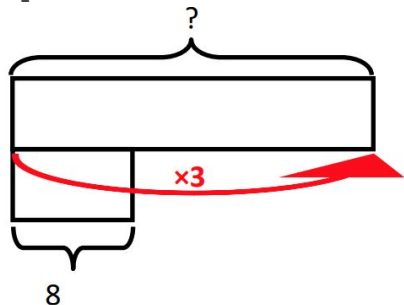
Part A

Do these bar models represent part/whole or times greater/more questions?



Part B

Match these word problems to the best bar models which would help answer them



Robin had a score of 24 in the archery competition. The sheriff's score was only one third as much. What was the sheriff's score?

For 3 days Friar Tuck collected 8 coins. How many coins did he collect in total?

The Sheriff fired 3 arrows in the time given. Robin Hood fired 8 times as many. How many did Robin Hood fire?

