

Maths

# **Multiplication and Division: Division facts for the multiplication table of four**





## **Independent Task**

Mrs Crane



# Independent Task

Complete the equations that each array represents.

	
$20 \div 4 = \square$	$20 \div 5 = \square$
	
$36 \div \square = 9$	$36 \div \square = 4$
	
$\square \div 4 = 10$	$\square \div 10 = 4$
	
$\square \div \square = \square$	$\square \div \square = \square$

