

Maths

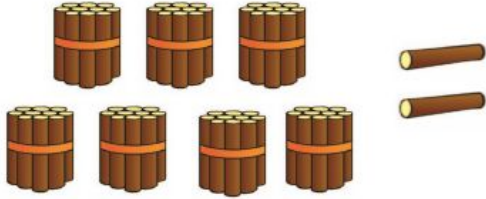






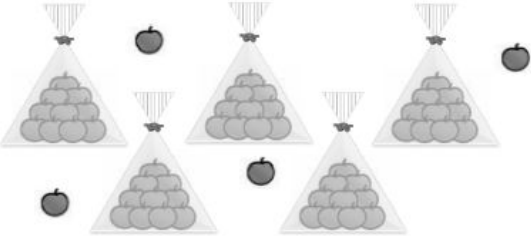




















**To explore the components of numbers within 100.**

Miss Sidhu and Mrs Bramble



# Independent Task

## Task 1

	<table border="1"> <tbody> <tr> <td></td> <td></td> </tr> <tr> <td>7</td> <td>2</td> </tr> </tbody> </table>			7	2				
									
7	2								
	<table border="1"> <tbody> <tr> <td></td> <td></td> </tr> <tr> <td>5</td> <td>4</td> </tr> <tr> <td>Tens</td> <td>Ones</td> </tr> <tr> <td>5</td> <td>4</td> </tr> </tbody> </table>			5	4	Tens	Ones	5	4
									
5	4								
Tens	Ones								
5	4								
	<table border="1"> <tbody> <tr> <td></td> <td></td> </tr> <tr> <td>4</td> <td>5</td> </tr> <tr> <td>Tens</td> <td>Ones</td> </tr> <tr> <td>4</td> <td>5</td> </tr> </tbody> </table>			4	5	Tens	Ones	4	5
									
4	5								
Tens	Ones								
4	5								
	<table border="1"> <tbody> <tr> <td></td> <td></td> </tr> <tr> <td>3</td> <td>6</td> </tr> <tr> <td>Tens</td> <td>Ones</td> </tr> <tr> <td>3</td> <td>6</td> </tr> </tbody> </table>			3	6	Tens	Ones	3	6
									
3	6								
Tens	Ones								
3	6								



# Independent Task

## Task 2

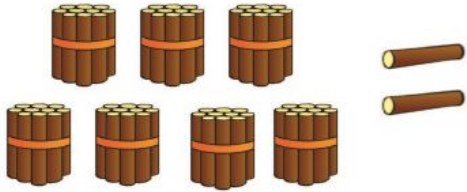






forty three
fifty three
sixty three
seventy three
forty five
forty six
forty seven
forty eight

tens	ones
4	3
tens	ones
tens	ones
tens	ones
tens	ones
tens	ones
tens	ones

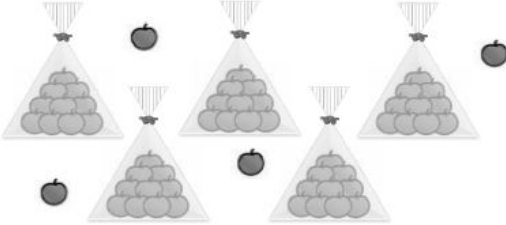








# Answers








## Task 1

	<table border="1"><tbody><tr><td></td><td></td></tr><tr><td>7</td><td>2</td></tr></tbody></table>			7	2
					
7	2				
	<table border="1"><thead><tr><th>Tens</th><th>Ones</th></tr></thead><tbody><tr><td>7</td><td>2</td></tr></tbody></table>	Tens	Ones	7	2
Tens	Ones				
7	2				

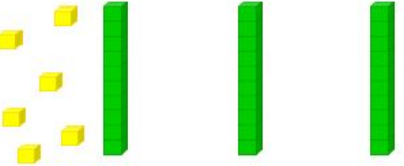






  

	<table border="1"><tbody><tr><td></td><td></td></tr><tr><td>5</td><td>4</td></tr></tbody></table>			5	4
					
5	4				
	<table border="1"><thead><tr><th>Tens</th><th>Ones</th></tr></thead><tbody><tr><td>5</td><td>4</td></tr></tbody></table>	Tens	Ones	5	4
Tens	Ones				
5	4				

	<table border="1"><tbody><tr><td></td><td></td></tr><tr><td>4</td><td>5</td></tr></tbody></table>			4	5
					
4	5				
	<table border="1"><thead><tr><th>Tens</th><th>Ones</th></tr></thead><tbody><tr><td>4</td><td>5</td></tr></tbody></table>	Tens	Ones	4	5
Tens	Ones				
4	5				

	<table border="1"><tbody><tr><td></td><td></td></tr><tr><td>3</td><td>6</td></tr></tbody></table>			3	6
					
3	6				
	<table border="1"><thead><tr><th>Tens</th><th>Ones</th></tr></thead><tbody><tr><td>3</td><td>6</td></tr></tbody></table>	Tens	Ones	3	6
Tens	Ones				
3	6				



# Answers

## Task 2

forty three
fifty three
sixty three
seventy three
forty five
forty six
forty seven
forty eight

tens	ones
4	3
tens	ones
5	3
tens	ones
6	3
tens	ones
7	3
tens	ones
4	5
tens	ones
4	6
tens	ones
4	7
tens	ones
4	8

