

Mathematics

Triangle constructions

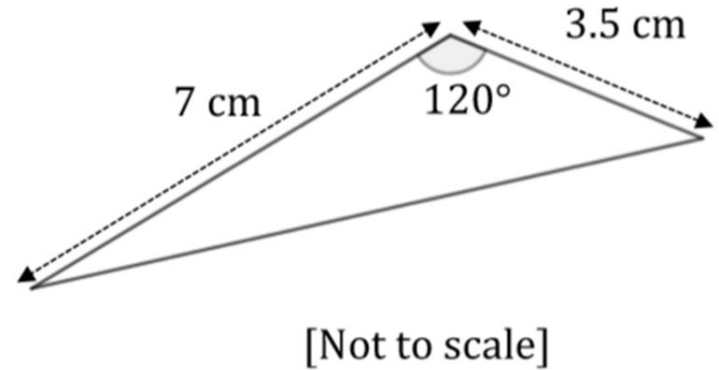
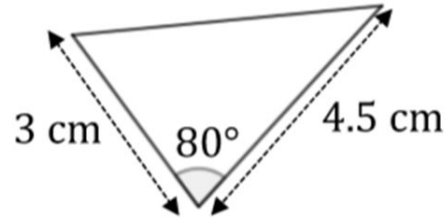
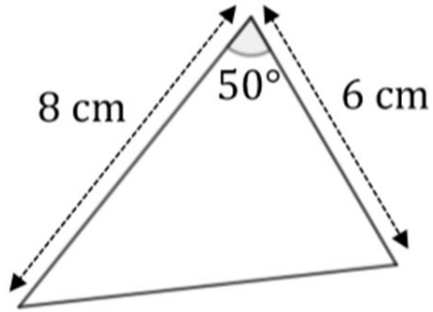
Independent Task

Miss Oreyomi



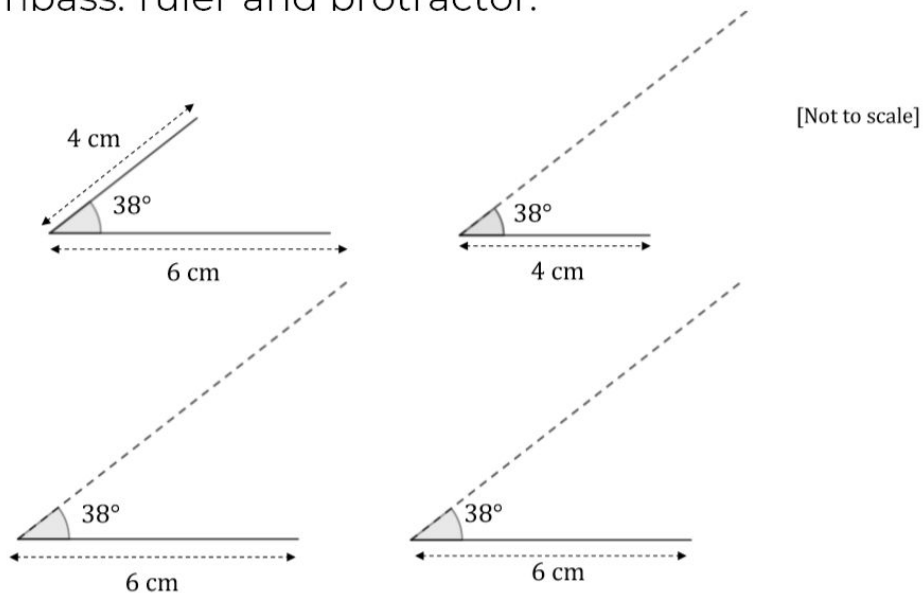
Questions

1) Draw the following triangles accurately using a ruler and a protractor:



Questions

2) Brenda has started to construct four different triangles that have an interior angle of 38° and two side length 4cm and 6cm. Copy and **complete** each of her constructions using a compass, ruler and protractor.



Questions

- 3) Use a compass, ruler and protractor to draw as many triangles as you can with:
- a) Two sides of length 4cm and 8cm and one interior angle of 50° .

