

Maths

Multiplication and Division: To create bar models that can be used to represent multiplication and division

Independent Task

Mrs Crane



Independent Task


Create a bar model before solving the problem.

Remember, you can use the arrays to help you draw your bar models!

Nigel is baking and needs 4 eggs to bake a cake.

How many eggs will he need to bake 6 cakes?

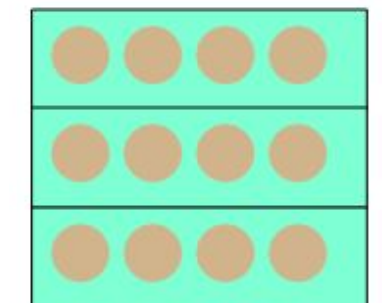
What equation does the bar model represent?



There are 3 bags of apples with 4 apples in each bag.

How many apples are there altogether?

What equation does the bar model represent?




Independent Task

Create a bar model before solving the problem.

Remember, you can use the arrays to help you draw your bar models!

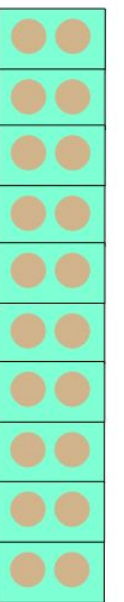
There are 5 children sitting at each table.

How many children are sitting at 6 tables?



What equation does the bar model represent?

There are 20 chips on a plate. Eva and Ryan divided them equally between them. How many chips did they each get?



What equation does the bar model represent?

