

Mathematics

Giving change

Lesson 8 of 10

Ms.Dobrowolski



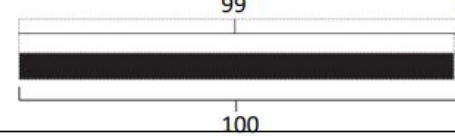
Independent Task

Calculate the change for each example. Use any strategy you think makes sense.

I went to the supermarket and I bought a comic that cost 99p.

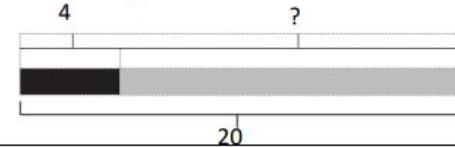
I gave the shopkeeper a £1 coin.

How much change should I receive?



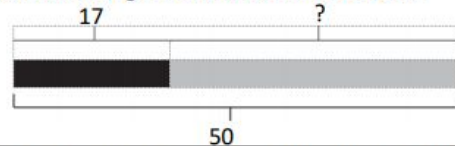
I went to the supermarket and I bought a book that cost £4. I gave the shopkeeper a £20 note.

How much change should I have received?



I went to the supermarket and I bought a packet of sweets that cost 17p. I gave the shopkeeper a 50p coin.

How much change should I have received?



I went to the supermarket and I bought a radio that cost £39. I gave the shopkeeper a £50 note.

How much change should I have received?

