

Maths

# **Shapes:**

## **To draw 2-D shapes**

### **Independent Activity**


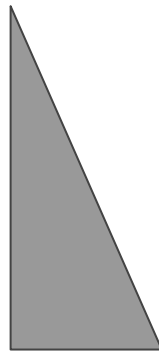
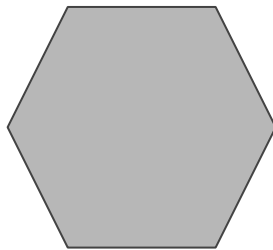
Miss Brinkworth



## Part A









Complete the table below (1 shape fits 2 boxes)

property	shape or shapes
only one right angle	
more than four angles	
at least one angle greater than a right angle	
at least one angle smaller than a right angle	



## Part B

2 of these shapes are in the wrong place - can you find them?

<u>Contains only 1 right angle</u>		
<u>More than 4 angles</u>		
<u>At least one acute angle</u>		
<u>At least one obtuse angle</u>		



## Part C

Have a go at drawing the 2-D shape from the description

1. A 3 sided-shape with only acute angles

3. A shape with more than 4 angles

2. A quadrilateral with only 2 right angles

4. A shape with 2 acute and 2 obtuse angles

Challenge - describe this shape using as many star words as possible

