

Mathematics

Ordering numbers within 100

















Miss Hughes



Independent Task

Order each of the numbers in increasing or decreasing order.

Write the ordered numbers in the boxes.

			
<input type="text"/>	<input type="text"/>	<input type="text"/>	<input type="text"/>
Increasing			
			
<input type="text"/>	<input type="text"/>	<input type="text"/>	<input type="text"/>
Decreasing			
			
<input type="text"/>	<input type="text"/>	<input type="text"/>	<input type="text"/>
Decreasing			
			
<input type="text"/>	<input type="text"/>	<input type="text"/>	<input type="text"/>
Increasing			



Independent Task - Answers

Order each of the numbers in **increasing** or **decreasing** order.

Write the ordered numbers in the boxes.

