

Mathematics

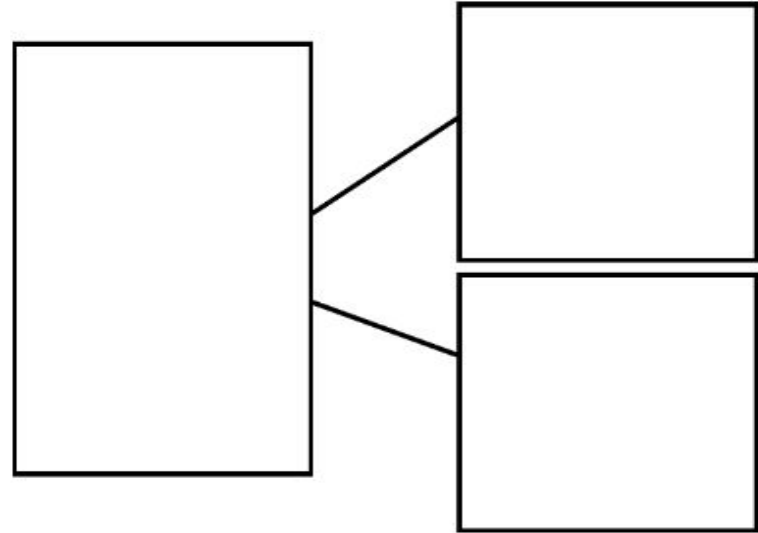
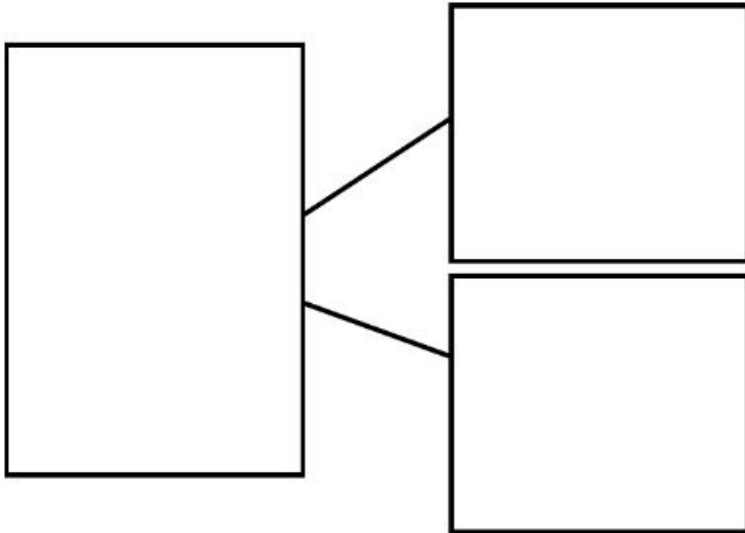
Revisiting numbers within 100

Miss Hughes



Independent Task

43



Independent Task



35

What do I need to add to 35 to get 100?

$100 = 10 \text{ groups of } 10$



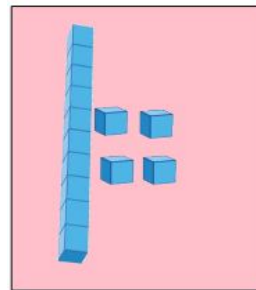
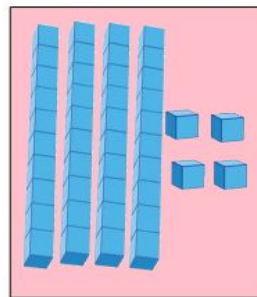
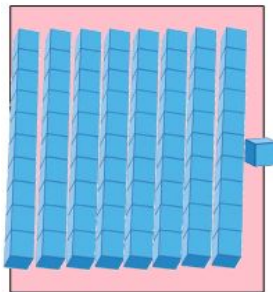

Independent Task

Are these
numbers in
increasing or
decreasing
order?

90	80	70	17	7
99	98	95	92	90



Independent task



Put these numbers in **decreasing** order



Independent Task - Answers

43

$$43 = 40 + 3$$

$$43 = 30 + 13$$

$$43 = 20 + 23$$

$$43 = 10 + 33$$


$$43 = 0 + 43$$



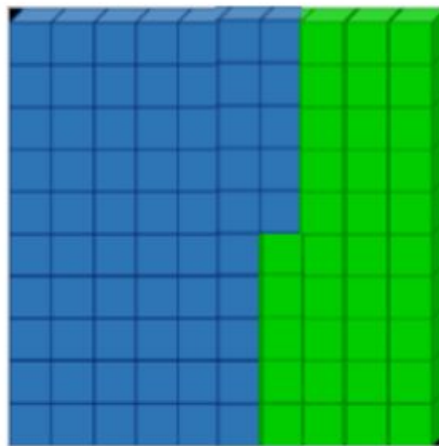
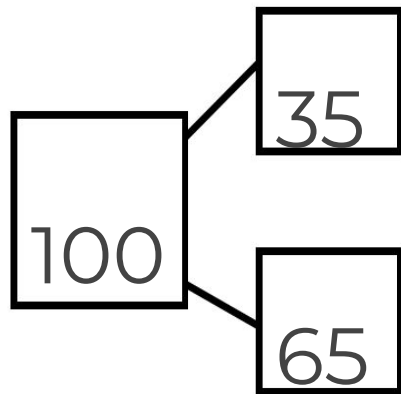
Independent Task - Answers

What do I need to add to 35 to get 100?

100 = 10 groups of 10



35



Independent Task - Answers

Are these
numbers in
increasing or
decreasing
order?

90	80	70	17	7
----	----	----	----	---


decreasing

99	98	95	92	90
----	----	----	----	----

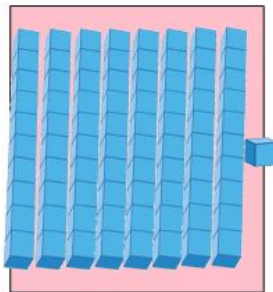
decreasing



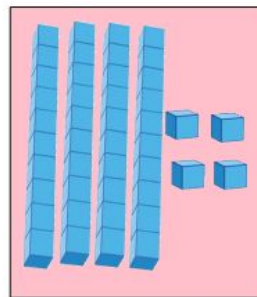
Independent task - Answers



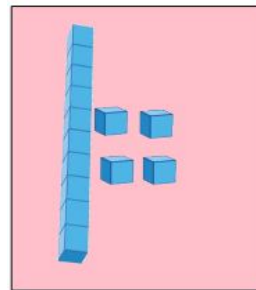
81



44



41



14

Put these numbers in **decreasing** order

