

Mathematics Independent Task

Grouping and sharing **Exploring sharing quantities into** **equal groups**

Mrs Khaira









Activity 1

ten 10  	five 5 	ten 10    
twelve 12   	sixteen 16    	twenty 20  
twenty one 21   	twenty four 24    	twenty five 25    









Activity 2

	 <input type="text"/> shared equally between 3 is <input type="text"/> .
	 <input type="text"/> shared equally between 2 is <input type="text"/> .
	 <input type="text"/> shared equally between 4 is <input type="text"/> .



Activity 2

  <input data-bbox="608 808 705 889" type="text"/> shared equally between 5 is <input data-bbox="608 358 705 440" type="text"/> .
  <input data-bbox="1014 808 1110 889" type="text"/> shared equally between 2 is <input data-bbox="1014 358 1110 440" type="text"/> .
  <input data-bbox="1429 808 1526 889" type="text"/> shared equally between 4 is <input data-bbox="1429 358 1526 440" type="text"/> .

