

Maths

To add a two-digit number and ones with regrouping

Independant Task


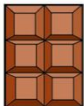







Mrs Bramble & Miss
Sidhu



Independent Task

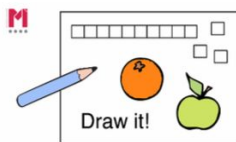
Task 1

How much do these children spend?

1.  buys  and 
2.  buys  and 
3.  buys  and 




Use a number line or
Dienes to help you to
solve the problems.

What would you buy?
How much would it cost?



Answers

Task 1

1.  buys  and  $58p + 6p = 64p$

2.  buys  and  $28p + 8p = 36p$

3.  buys  and  $36p + 6p = 42p$

