

Mathematics

Lesson 3 of 5

Addition and subtraction: Combining two groups including zero

Miss. Molnar




Use the part whole model and counting objects to add the amounts in each box.
Use the sentence stem to explain outloud.

There are ____ shirts.

There are ____ hats.

The whole is ____.

____ plus ____ is equal to ____.




Use the part whole model and counting objects to add the amounts in each box.
Use the sentence stem to explain outloud.

There are ____ trees.

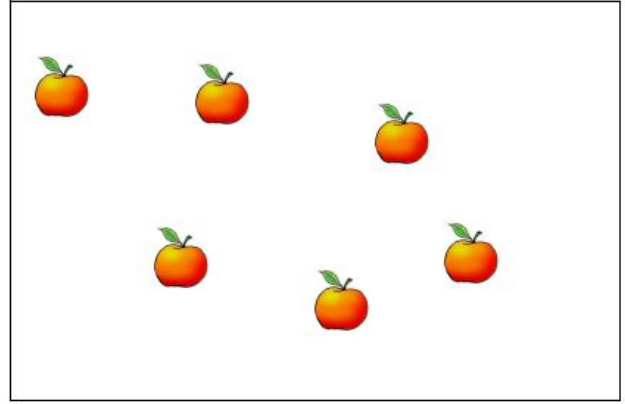
There are ____ nests.

The whole is ____.

____ plus ____ is equal to ____.



There are ____ apples.
The whole is ____.
____ plus ____ is equal to ____.



There are ____ frogs.
The whole is ____.
____ plus ____ is equal to ____.

