

# Calculating duration of time in hours and minutes




Mathematics

Miss Sabzvari



# Independent Task

- Fill** in the missing values on the race table.
- Use your clocks to **calculate** the answers.
- Draw** the minute and hour hands on the clocks.

Runner	Start time		Duration	End time
Laura		Twenty to eight	1 hour and 20 minutes	
Becca			1 hour and 20 minutes	Five past eight
John		Twenty past four		Five to six

