

Maths

Identifying tens and ones in a 2-digit number

Miss Hughes











Independent task

Use a
place value chart to
represent how
many fruit there
are.

Then record the number
of fruit in the boxes by
drawing the
representation.

There are _____ tens and _____ ones.

There are _____ altogether.

 <input type="text"/>	 <input type="text"/>
 <input type="text"/>	 <input type="text"/>
 <input type="text"/>	 <input type="text"/>
 <input type="text"/>	 <input type="text"/>



Independent task - Answers

Use a
place value chart to
represent how
many fruit there
are.

Then record the number
of fruit in the boxes by
drawing the
representation.

There are _____ tens and _____ ones.

There are _____ altogether.

