

To identify perpendicular lines

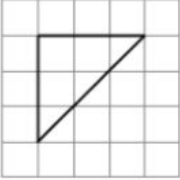
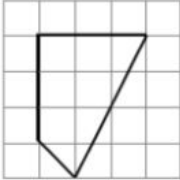
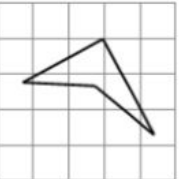
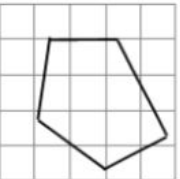
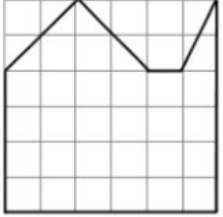
Maths

Miss Brinkworth



Part A:

Find the perpendicular lines in these shapes

<p>a</p> 	<p>b</p> 
<p>c</p> 	<p>d</p> 
<p>e</p> <p>This shape has more than one pair of perpendicular lines. Can you find them all?</p> 	

Any 2 straight lines that meet are perpendicular

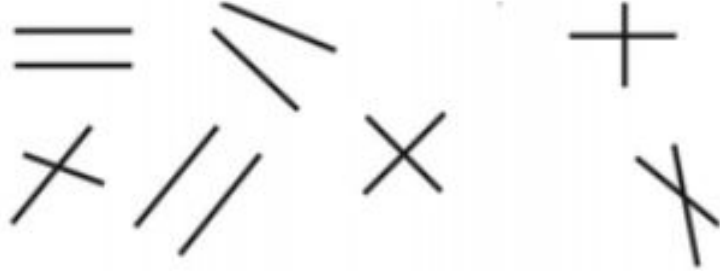
Do you think this is true or false?

Explain...



Part B:

1. Which of these lines are perpendicular?



2. Does this shape contain 4 pairs of perpendicular lines? How do you know?

