

Mathematics

Naming and describing 3D shapes

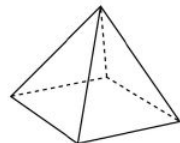
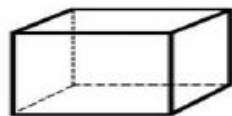

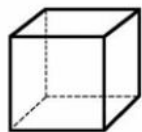
Independent Task

Miss Mitchell



Choose the shapes from below to match the descriptions.

1. I have one curved surface I have 0 edges. I have 0 vertices. What shape am I?
2. I have 6 faces. All of my faces are 4-sided. I have 8 vertices. What shape am I?



Choose the shapes from below to match the descriptions.

1. How many vertices does a square based pyramid have?
2. I have 3 faces, 0 vertices and 2 edges. What shape am I?
3. Which shape has the most edges?

