

Mathematics






Comparing and classifying quadrilaterals

Miss Darwish



Independent task 1

Match the shape with the correct name of each quadrilateral.



parallelogram

rectangle

square

rhombus

trapezium



Independent task 2

Design a robot which has....

A rhombus for a head.

A rectangle for a body.

A square for each eye.

A parallelogram for
each arm and leg.

