

Maths

**To find the total cost of two items**

**Independent Task**

Mrs Bramble and Miss  
Charlton



# Independent Task

## Fairyland



Cake..... 40 p



Apple..... 20 p



Sandwich..... 50 p



Chocolate biscuit..... 10 p



Orange juice..... 30 p



Banana..... 30 p






Milk..... 40 p

How many  
different pairs  
of items can  
you find the  
cost of?

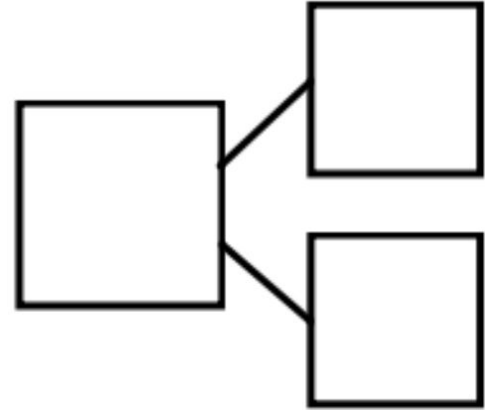


# Independent Task Example

				
<div>40 p</div>	+	<div>10 p</div>	=	<div>50 p</div>
				



# Independent Task Support



# Independent Task Support

$$\square + \square = \square$$

$$\square + \square = \square$$

