

Numbers within 15

Counting up to 15 objects and putting them in order

Mathematics

Independent Task

Mrs Khaira


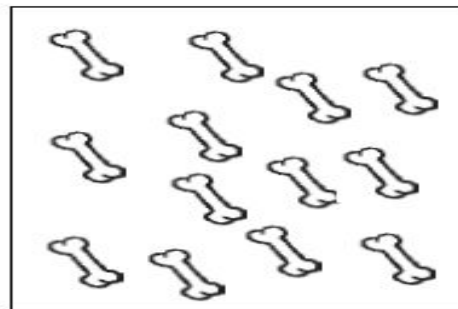


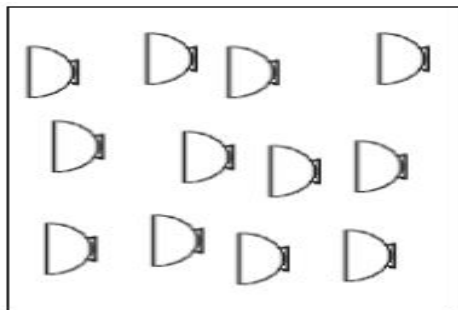


Activity 1

0	zero	1	one	2	two	3	three
4	four	5	five	6	six	7	seven
8	eight	9	nine	10	ten	11	eleven
12	twelve	13	thirteen	14	fourteen	15	fifteen



Activity 1



Activity 2

