

Maths

To find one more or one less and ten more and ten less.

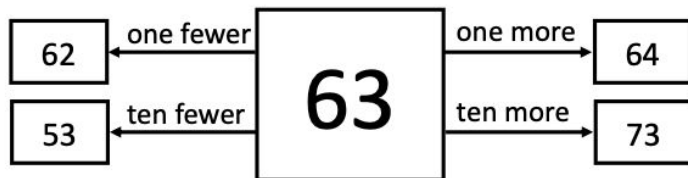
Mrs Bramble & Miss Sidhu



Independent Task

Task

1. Fill in the missing numbers.




2. Now complete these sentences using the support below.

98 is 88.

78 is 88.

89 is 88.

87 is 88.

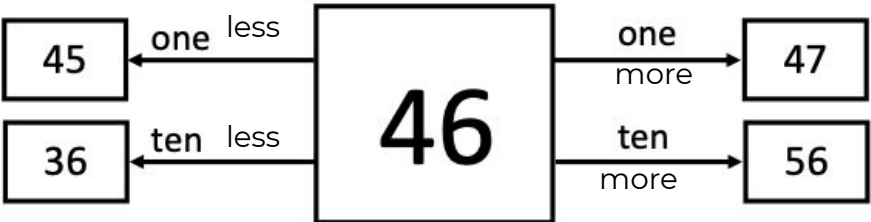



one more than ten more than

one less than ten less than



Answers



2. Now complete these sentences using the support below.

98 is

ten more than

88.

78 is

ten less than

88.

89 is

one more than

88.

87 is

one less than

88.

one more than

ten more than

one less than

ten less than

